



Florida FAST Grade 3 Math In 10 Days

Test Prep for 3rd Graders

Dr. A. Nazari

Copyright © 2026 Dr. A. Nazari

Published by View Math Education

ViewMath.com

All rights reserved. No part of this publication may be reproduced, distributed, or transmitted in any form or by any means, including photocopying, recording, or other electronic or mechanical methods, without the prior written permission of the author, except in the case of brief quotations embodied in critical reviews and certain other noncommercial uses permitted by copyright law, including Section 107 or 108 of the 1976 United States Copyright Act.

The information in this book is distributed on an “as is” basis, without warranty. While every precaution has been taken in the preparation of this work, neither the author nor the publisher shall have any liability to any person or entity with respect to any loss or damage caused or alleged to be caused directly or indirectly by the information contained in this book.

Copyright © 2026

☆ You've Got This! ☆

In just 10 days, you'll be ready to ace your math test!

📖 *How This Book Works* 📖

- 📅 *Review 3–5 topics each day — quick and focused!*
- 📄 *Review cards remind you of key rules and formulas*
- ✎ *Practice problems help you feel confident*
- 🛡️ *Test tips show you common mistakes to avoid*
- ✅ *Check off each day when you're done!*
- 💖 *Relax — you already know all of this!*

Tips for Success

- ✅ *Find a quiet place to study*
- ✅ *Review for 25–35 minutes each day*
- ✅ *Don't stress — this is just a review!*
- ✅ *Take a deep breath before each session*
- ✅ *You've learned all this in class already!*

☆ *Let's review and shine!* ☆



PREVIEW

© 2026 Dr. A. Nazari • ViewMath.com — All Rights Reserved



Get Online



Find more at
ViewMath.com/FL-Grade3







How to Use This Book


This book is designed to help you **review everything you've already learned** in Grade 3 math. Each day covers 3–5 topics with quick review cards and practice problems.

Each Day Has:

1. **Day Opener** — See what you'll review today and track your progress.
2. **Review Cards** — Quick reminders of the key rules and formulas. Each card shows one important idea and a quick example.
3. **Test Tip** — Learn about common mistakes and how to avoid them on test day.
4. **Test Practice** — Try 2–3 problems for each topic. These are similar to what you'll see on your test.
5. **Confidence Check** — Rate how you feel about each topic. If you need more practice, go back and review!

Suggested Schedule:

-  Study **one day per session** (25–35 minutes)
-  Start **10 days before your test**
-  Check off each day on the **Progress Tracker**
-  Use the **Answer Key** at the back to check your work

 **Remember:** You already know all of this! This book just helps you feel confident and ready.

X¹ Math Symbols You Should Know X¹

You'll see these symbols throughout this book!

Symbol	Name	What It Means	
+	Plus (Add)	Put numbers together.	$3 + 5 = 8$
-	Minus (Subtract)	Take away from a number.	$9 - 4 = 5$
×	Times (Multiply)	Add equal groups.	$4 \times 3 = 12$
÷	Divide	Split into equal groups.	$12 \div 3 = 4$
=	Equals	Both sides are the same.	$2 + 3 = 5$
>	Greater Than	The left number is bigger.	$7 > 3$
<	Less Than	The left number is smaller.	$2 < 9$
$\frac{1}{2}$	Fraction Bar	Part of a whole. $\frac{1}{2}$ means 1 out of 2 equal parts	

Remember the Alligator!



The **greater than** (>) and **less than** (<) symbols are like an alligator's mouth. The alligator always wants to eat the **bigger** number!

$$8 > 3$$

8 is greater than 3

$$2 < 9$$

2 is less than 9

 **Key Math Words for Grade 3**

- **Sum** — the answer when you add
- **Difference** — the answer when you subtract
- **Product** — the answer when you multiply
- **Quotient** — the answer when you divide
- **Factor** — a number you multiply
- **Array** — objects in rows and columns
- **Fraction** — a part of a whole
- **Numerator** — the top number in a fraction
- **Denominator** — the bottom number
- **Equation** — a math sentence with =
- **Estimate** — a smart guess, close to the real answer
- **Perimeter** — the distance around a shape
- **Area** — the space inside a shape
- **Rounding** — making a number simpler by going to the nearest ten or hundred

PREVIEW



Get Online



Find more at
[ViewMath.com/FL-Grade3](https://www.viewmath.com/FL-Grade3)



ViewMath.com



Multiplication Table

Use this chart to practice your multiplication facts!

×	1	2	3	4	5	6	7	8	9	10	11
1	1	2	3	4	5	6	7	8	9	10	11
2	2	4	6	8	10	12	14	16	18	20	22
3	3	6	9	12	15	18	21	24	27	30	33
4	4	8	12	16	20	24	28	32	36	40	44
5	5	10	15	20	25	30	35	40	45	50	55
6	6	12	18	24	30	36	42	48	54	60	66
7	7	14	21	28	35	42	49	56	63	70	77
8	8	16	24	32	40	48	56	64	72	80	88
9	9	18	27	36	45	54	63	72	81	90	99
10	10	20	30	40	50	60	70	80	90	100	110
11	11	22	33	44	55	66	77	88	99	110	121

How to Use This Table

To find 4×7 :

1. Find **4** in the left column (blue).
2. Find **7** in the top row (blue).
3. Follow the row and column until they meet: the answer is **28!**

Your 10-Day Plan

Here's what you'll review each day:

<i>Day</i>	<i>Theme</i>	<i>Topics</i>
1	<i>Numbers & Place Value</i>	<i>Place value, thousands, comparing, rounding, even & odd</i>
2	<i>Addition & Subtraction</i>	<i>Adding/subtracting 3- and 4-digit numbers, estimating</i>
3	<i>Multiplication Basics</i>	<i>Multiplication concepts, facts 0–10, multiply by 10/100, properties</i>
4	<i>Division Mission</i>	<i>Division concepts, facts, multiplication–division link, missing numbers</i>
5	<i>Word Problems & Patterns</i>	<i>Mult/div word problems, two-step problems, patterns</i>
6	<i>Fraction Foundations</i>	<i>Understanding fractions, number line, unit fractions, equivalent fractions</i>
7	<i>Fractions & Shapes</i>	<i>Whole numbers as fractions, comparing, 3D shapes, partitioning</i>
8	<i>Time & Measurement</i>	<i>Telling time, elapsed time, length, mass, liquid volume</i>
9	<i>Money & Data</i>	<i>Counting money, making change, picture/bar graphs, line plots</i>
10	<i>Geometry & Area</i>	<i>2D shapes, area, finding area, perimeter</i>

Test-Day Tips

Remember these on the day of your test!

1. **Get a good night's sleep** the night before. Your brain works best when it's rested!
2. **Eat a healthy breakfast.** A full tummy helps you think clearly.
3. **Read each question carefully** — at least **twice!** Circle the numbers and underline what the question is asking.
4. **Show your work.** Write out your steps so you can check them.
5. **Check your answer.** Does it make sense? Is it reasonable?
6. **Skip and come back.** If a question is too hard, skip it and answer the easier ones first. You can always come back to it later.
7. **Eliminate wrong answers.** For multiple-choice questions, cross out answers that are clearly wrong. This gives you a better chance!
8. **Watch your signs.** Make sure you're doing the right operation: + (add), - (subtract), \times (multiply), or \div (divide).
9. **Don't rush.** Take your time. It's better to answer fewer questions correctly than to rush and make mistakes.
10. **You've got this!** You studied all 30 topics. Take a deep breath and do your best. That's all anyone can ask!



Believe in yourself — you're ready!

📅 My Progress Tracker 📅

Check off each day when you finish it!

📅 My 10-Day Progress 📅

Day 1 <input type="checkbox"/>	Day 2 <input type="checkbox"/>	Day 3 <input type="checkbox"/>	Day 4 <input type="checkbox"/>	Day 5 <input type="checkbox"/>
Day 6 <input type="checkbox"/>	Day 7 <input type="checkbox"/>	Day 8 <input type="checkbox"/>	Day 9 <input type="checkbox"/>	Day 10 <input type="checkbox"/>





☑ = Done! Color each day when you finish it!

PREVIEW

Take Your Learning Online with ViewMath Academy!

For Parents, Teachers & Students

Love what you're reading? ViewMath Academy is your **free online companion** to this book — practice what you learn, track your progress, and master every topic!

-  **Topic Quizzes** — Test yourself on each topic right after you study it in this book
-  **Lessons** — Review any concept with online lessons that match each chapter
-  **Progress Tracking** — Watch your mastery grow as you work through the book
-  **Practice Tests** — When you're ready, take a full practice test and analyze your score online



Scan to visit ViewMath Academy

 [ViewMath.com/FL-Grade3](https://www.viewmath.com/FL-Grade3)

 Free to use • No downloads required • Works on any device





DAY

1

Number Ninja

📖 What We'll Review Today 📖

- ✓ *Understand place value up to thousands*
- ✓ *Compare, order, and round numbers*
- ✓ *Identify even and odd numbers*

📊 Your Progress: Day 1 of 10

10%

☆ *Let's get started — you know this stuff!* ☆



♥ Take a deep breath. You already learned all of this in class — today we're just making sure everything is fresh in your mind!

Place Value: Ones, Tens, Hundreds

Each digit in a number has a **place value**. In **527**: the **5** is in the hundreds place (500), the **2** is in the tens place (20), and the **7** is in the ones place (7).

Quick Example: What is the value of the 4 in **461**?

→ The 4 is in the **hundreds** place, so its value is **400**.

Place Value: Thousands

The **thousands** place is the 4th digit from the right. Always use a **comma** after the thousands digit: 3,472 not 3472. Remember: each place is 10 times the place to its right.

Quick Example: Write 7,206 in expanded form.

→ $7,000 + 200 + 0 + 6$

Comparing & Ordering Numbers

Compare numbers digit by digit from **left to right**. The first different digit tells you which number is greater. Use $<$ (less than), $>$ (greater than), or $=$ (equal to).

Quick Example: Compare 637 and 682.

→ Hundreds are both 6. Tens: $3 < 8$. So **637 < 682**.

Rounding to the Nearest 10 or 100

Look at the digit **one place to the right** of where you're rounding. If it's 0–4, round **down**. If it's 5–9, round **up**.

Quick Example: Round 268 to the nearest 10.

→ Ones digit is 8 (≥ 5), so round up: **270**.



Get Online



Find more at
[ViewMath.com/FL-Grade3](https://www.viewmath.com/FL-Grade3)



 **Even & Odd Numbers**

Just check the **ones digit**. Even numbers end in 0, 2, 4, 6, 8. Odd numbers end in 1, 3, 5, 7, 9. Zero is even. Remember: $Even + Even = Even$, $Odd + Odd = Even$, $Even + Odd = Odd$.

Quick Example: Is 1,286 even or odd?

→ Ones digit is 6 → **Even**.

 **Don't Rush Place Value!**

On the test, always **underline** the digit the question asks about before you answer. Many students give the digit itself (4) instead of its **value** (400). Read carefully!



“ Great start! You already know your numbers — let's prove it! ”

 **Test Practice****Place Value**

1. What is the value of the 5 in 5,841? _____
2. Write 903 in expanded form. _____

Comparing & Ordering

3. Which symbol goes in the box? 4,512 \square 4,521
4. Order from least to greatest: 789, 798, 779. _____

Rounding**Get Online**Find more at
[ViewMath.com/FL-Grade3](https://www.viewmath.com/FL-Grade3)

5. Round 453 to the nearest 100. _____

6. Round 3,847 to the nearest 10. _____

Even & Odd

7. Is 2,457 even or odd? _____

8. Even + Odd = _____

★ Bonus Challenge

9. A number has a 4 in the thousands place, a 0 in the hundreds place, an 8 in the tens place, and a 2 in the ones place. Write the number and round it to the nearest 100. _____

10. Sam is thinking of a 3-digit number. It is odd, greater than 500, and has a 7 in the tens place. The sum of its digits is 15. What is the number? _____

👍 How Do You Feel? 👍

Topic	★ Got it!	☆ Almost	○ Need more
Place Value	<input type="checkbox"/>	<input type="checkbox"/>	<input type="checkbox"/>
Comparing & Ordering	<input type="checkbox"/>	<input type="checkbox"/>	<input type="checkbox"/>
Rounding	<input type="checkbox"/>	<input type="checkbox"/>	<input type="checkbox"/>
Even & Odd	<input type="checkbox"/>	<input type="checkbox"/>	<input type="checkbox"/>



Get Online



Find more at
[ViewMath.com/FL-Grade3](https://www.viewmath.com/FL-Grade3)



✔ *Day Complete! You're getting closer!* ✔

- I reviewed all the topics I finished the practice

PREVIEW



Get Online



Find more at
[ViewMath.com/FL-Grade3](https://www.viewmath.com/FL-Grade3)





DAY

5

Problem-Solving Power

📖 What We'll Review Today 📖

- ✓ *Solve multiplication & division word problems*
- ✓ *Tackle two-step word problems*
- ✓ *Find patterns in tables*

📊 Your Progress: Day 5 of 10

50%

☆ *Halfway there — keep going!* ☆



♡ *Word problems can feel tricky, but you have a secret weapon: **read, circle, underline, solve.** You've got this!*

Multiplication & Division Word Problems

Multiply when you know the number of groups AND the group size and need the total. **Divide** when you know the total and need to find the group size or number of groups. Look for clue words: "each," "every," "equally," "share," "times as many."

Quick Example: "36 cookies shared equally among 4 friends."

→ $36 \div 4 = 9$ cookies each.

Two-Step Word Problems

Two-step problems need **two operations** (any mix of $+$, $-$, \times , \div). Find the **hidden question** first — solve that, then use the answer for step 2.

Quick Example: "3 packs of 8 pencils, then give away 5."

→ Step 1: $3 \times 8 = 24$. Step 2: $24 - 5 = 19$ pencils.

Patterns in Tables

Look for a **rule** that connects the numbers. Common patterns: add the same number, multiply by the same number, or follow an even/odd pattern. The multiplication table is **symmetric** — 3×5 and 5×3 give the same answer.

Quick Example: 4, 8, 12, 16, ? → Rule: add 4 → 20

How to Tackle Word Problems

1. **Read** the problem twice.
2. **Circle** the numbers and **underline** the question.
3. **Choose** the operation (add, subtract, multiply, or divide).
4. **Solve** and **check** your answer.



Get Online



Find more at
[ViewMath.com/FL-Grade3](https://www.viewmath.com/FL-Grade3)



 **Find the Hidden Question**

In two-step problems, ask yourself: "What do I need to figure out **first** before I can answer the real question?" Solving the hidden question is half the battle!



“ Word problems are just stories with numbers — you’re a great reader! ”

 **Test Practice****Multiplication & Division Word Problems**

1. A classroom has 5 rows of desks with 6 desks in each row. How many desks are there in all?

2. 32 students are divided equally into 4 teams. How many students are on each team? _____

Two-Step Word Problems

3. Maria has 3 bags with 7 apples each. She eats 4 apples. How many apples are left? _____
4. Jake buys 2 boxes of 10 crayons. He gives 6 crayons to his sister. How many crayons does Jake have now? _____
5. A baker makes 4 trays of 9 muffins each. She sells 15 muffins in the morning. How many muffins does she have left? _____

Patterns in Tables

6. Find the next number: 6, 12, 18, 24, ? _____
7. Complete the table:

**Get Online**Find more at
[ViewMath.com/FL-Grade3](https://www.viewmath.com/FL-Grade3)

In	1	2	3	4	5
Out	5	10	15	?	?

8. Find the next number: 3, 6, 12, 24, ? _____

★ **Bonus Challenge**

9. A farmer picks 7 baskets of 8 oranges each. He eats 2 oranges and shares the rest equally among 9 friends. How many oranges does each friend get? _____

10. Look at the pattern: 2, 6, 18, 54, ? What is the rule? What is the next number? _____

👍 **How Do You Feel?** 👍

Topic	★ Got it!	☆ Almost	○ Need more
Word Problems	<input type="checkbox"/>	<input type="checkbox"/>	<input type="checkbox"/>
Two-Step Problems	<input type="checkbox"/>	<input type="checkbox"/>	<input type="checkbox"/>
Patterns	<input type="checkbox"/>	<input type="checkbox"/>	<input type="checkbox"/>

✅ **Day Complete! You're getting closer!** ✅

I reviewed all the topics I finished the practice



Get Online



Find more at
[ViewMath.com/FL-Grade3](https://www.viewmath.com/FL-Grade3)



★ Check Your Answers! ★

Try each problem first, then look here to check your work.

It's OK to make mistakes — that's how we learn ★

Day 1 Number Ninja

1 5,000

2 $900 + 0 + 3$

3 $<$

4 779, 789, 798

5 500

6 3,850

7 Odd

8 Odd

9 4,082; rounded to 4,100

10 573

Explanations

1 The 5 is in the thousands place, so its value is $5 \times 1,000 = 5,000$.

2 9 is in the hundreds place (900), 0 is in the tens place (0), 3 is in the ones place (3). So $903 = 900 + 0 + 3$.

3 Both numbers have 4 in thousands and 5 in hundreds. Tens: $1 < 2$, so $4,512 < 4,521$.

4 All start with 7 in hundreds. Compare tens: $7 < 8 < 9$, so $779 < 789 < 798$.

5 The tens digit of 453 is 5 (which is ≥ 5), so round up: $453 \rightarrow 500$.



Get Online



Find more at
[ViewMath.com/FL-Grade3](https://www.viewmath.com/FL-Grade3)



- 6 The ones digit of 3,847 is 7 (which is ≥ 5), so round up: $3,847 \rightarrow 3,850$.
- 7 The ones digit of 2,457 is 7, which is odd, so 2,457 is odd.
- 8 Example: $4 + 3 = 7$ (odd). An even number plus an odd number always gives an odd result.
- 9 The number is $4,000 + 0 + 80 + 2 = 4,082$. To round to the nearest 100, look at the tens digit: $8 \geq 5$, so round up: $4,082 \rightarrow 4,100$.
- 10 The number is greater than 500, so the hundreds digit is 5, 6, 7, 8, or 9. The tens digit is 7. The digits must add to 15 and the ones digit must be odd. Try 5: ones = $15 - 5 - 7 = 3$ (odd \checkmark). The number is 573.

Day 5 Problem-Solving Power

1 30

2 8

3 17

4 14

5 21

6 30

7 20 and 25

8 48

9 6

10 Rule: multiply by 3; next number is 162

Explanations

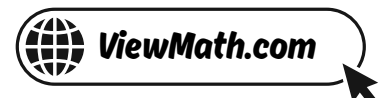
- 1 $5 \text{ rows} \times 6 \text{ desks per row} = 5 \times 6 = 30 \text{ desks in all.}$
- 2 $32 \div 4 = 8 \text{ students per team. Check: } 4 \times 8 = 32 \checkmark.$
- 3 Step 1: $3 \times 7 = 21 \text{ apples total. Step 2: } 21 - 4 = 17 \text{ apples left.}$



Get Online



Find more at
[ViewMath.com/FL-Grade3](https://www.viewmath.com/FL-Grade3)



- 4 Step 1: $2 \times 10 = 20$ crayons. Step 2: $20 - 6 = 14$ crayons left.
- 5 Step 1: Total muffins: $4 \times 9 = 36$. Step 2: After selling: $36 - 15 = 21$ muffins left.
- 6 The pattern adds 6 each time: 6, 12, 18, 24. Next: $24 + 6 = 30$.
- 7 Rule: $Out = In \times 5$. So $4 \times 5 = 20$ and $5 \times 5 = 25$.
- 8 Each number is doubled (multiplied by 2): $3 \times 2 = 6$, $6 \times 2 = 12$, $12 \times 2 = 24$, $24 \times 2 = 48$.
- 9 Step 1: Total oranges: $7 \times 8 = 56$. Step 2: After eating 2: $56 - 2 = 54$. Step 3: Shared among 9 friends: $54 \div 9 = 6$ oranges each.
- 10 Each number is multiplied by 3: $2 \times 3 = 6$, $6 \times 3 = 18$, $18 \times 3 = 54$. Next: $54 \times 3 = 162$.



Great job checking your work!

Keep practicing and you'll be a math star!



Get Online




Find more at
[ViewMath.com/FL-Grade3](https://www.viewmath.com/FL-Grade3)



Great Job! Keep Learning with ViewMath!


Keep up the great work! Visit viewmath.com/FL-Grade3 for free lessons, practice, and more.



All-in-One




Scan Me



Study Guide




Scan Me



Workbook



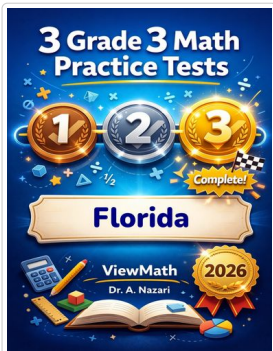
Scan Me



Step-by-Step



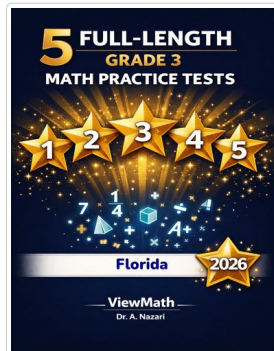
Scan Me



3 Practice Tests




Scan Me



5 Practice Tests



Scan Me



7 Practice Tests




Scan Me



10 Practice Tests




Scan Me



Math in 30 Days



Scan Me



Summer Review



Scan Me



Summer Bridge



Scan Me



Summer Workbook



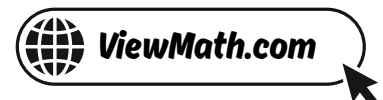
Scan Me



Get Online



Find more at ViewMath.com/FL-Grade3



Great Job! Keep Learning with ViewMath!

Keep up the great work! Visit [viewmath.com/FL-Grade3](https://www.viewmath.com/FL-Grade3) for free lessons, practice, and more.



Quizzes



Scan Me

Puzzles



Scan Me

Worksheets



Scan Me



Get Online



Find more at
[ViewMath.com/FL-Grade3](https://www.viewmath.com/FL-Grade3)



ViewMath.com



THANK YOU

Enjoyed This Preview?

Get the Full Book!

This preview shows just a small sample of what's inside.

The complete book includes:

- ✓ *All chapters and topics*
- ✓ *Hundreds of practice problems*
- ✓ *Complete answer key with explanations*
- ✓ *Colorful visuals and step-by-step examples*
- ✓ *Reference sheets and progress trackers*

 Visit us at [ViewMath.com](https://www.viewmath.com) for free resources and more books!