

South Carolina SC READY Grade 8 Math

Quizzes

Quick Topic Assessments with Answer Key

Dr. A. Nazari

Copyright © 2026 Dr. A. Nazari

Published by View Math Education

ViewMath.com

All rights reserved. No part of this publication may be reproduced, distributed, or transmitted in any form or by any means, including photocopying, recording, or other electronic or mechanical methods, without the prior written permission of the author, except in the case of brief quotations embodied in critical reviews and certain other noncommercial uses permitted by copyright law, including Section 107 or 108 of the 1976 United States Copyright Act.

The information in this book is distributed on an “as is” basis, without warranty. While every precaution has been taken in the preparation of this work, neither the author nor the publisher shall have any liability to any person or entity with respect to any loss or damage caused or alleged to be caused directly or indirectly by the information contained in this book.

Copyright © 2026

QUICK QUIZZES FOR EVERY TOPIC

Grade 8 Math Quizzes

Topic Quizzes • Chapter Reviews • Answer Key

Quick, focused quizzes are one of the best ways to find out what you really know — and what you still need to work on.

This book has a short quiz for every Grade 8 math topic. Each one takes about 10–15 minutes and covers the most important skills for that section. Take a quiz, score it, and see exactly where you stand.

Use it after studying a topic, the night before a test, or anytime you want a fast check-in on your math skills.



Take the Quiz

*10–15 minutes
per quiz*



Score It

*Check every answer
in the key*



Review & Retry

*Study what you missed
then quiz again*

CHAPTER

1

Irrational Numbers

★ *What's Inside* ★


Quiz 1: Real Number Subsets 3



PREVIEW



Find more at
[ViewMath.com/Grade8](https://www.viewmath.com/Grade8)



 CHAPTER 1

Quiz 1

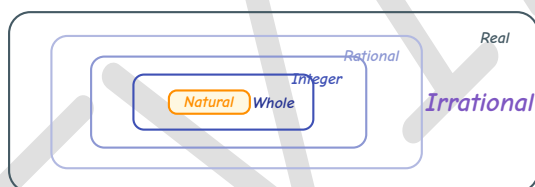
Real Number Subsets

 Name: _____

 Date: _____

 Score: _____ / 8

- 1 Which set of subsets does $\sqrt{49}$ belong to?
- A. Irrational, Real
B. Natural, Whole, Integer, Rational, Real
C. Integer, Rational, Real
D. Whole, Integer, Rational, Real
- 2 The diagram shows the real number subsets nested inside each other. In which **innermost** (most specific) region does 0 belong?



Natural

Whole

Integer

Rational

- 3 True or False: Every integer is a rational number.

True

False

- 4 Classify each number. Write **Y** (yes) or **N** (no) in each blank.

Number	Natural	Whole	Integer	Rational
-8	___	___	___	___
$\frac{2}{3}$	___	___	___	___
7	___	___	___	___



Get Online



Find more at
[ViewMath.com/Grade8](https://www.viewmath.com/Grade8)



- 5 A student classified $-\frac{5}{2}$ as shown on the card below. Find and explain the **error**.

Student's work: " $-\frac{5}{2}$ is negative, so it is an **integer**. It is also rational and real."

Show your work

- 6 A scientist measures a sample's weight as $0.\overline{3}$ grams. She classifies it as an **integer**. Is she correct?

- Yes, it is an integer
 No, it is rational but not an integer
 No, it is irrational
 No, it is a whole number

Bonus Challenge

This is a bonus question for extra credit. Give it your best attempt.

- 7 From the set $\{-8, 0, \sqrt{11}, \pi, \sqrt{49}, 0.\overline{3}\}$, find the **one** number that fits **all** three clues.

- **Clue 1:** I am a real number.
- **Clue 2:** I am **not** rational.
- **Clue 3:** I am the square root of a whole number.

Show your work

Score Summary

I got _____ out of _____ correct.



Find more at
[ViewMath.com/Grade8](https://www.viewmath.com/Grade8)



CHAPTER

2

Lines and Linear Equations

★ What's Inside ★

Quiz 2: Graphing Proportional Relationships 7



PREVIEW



Get Online



Find more at
[ViewMath.com/Grade8](https://www.viewmath.com/Grade8)



 CHAPTER 3

Quiz 2

Graphing Proportional Relationships

 Name: _____

 Date: _____

 Score: _____ / 8

- 1 The graph shows a proportional relationship. What is the **constant of proportionality** (k)?



A. 3

B. 2

C. 6

D. $\frac{1}{2}$

- 2 Complete the table for a proportional relationship.

Time (h)	1	3	5
Distance (mi)	8	_____	_____

- 3 True or False: The equation $y = 5x + 2$ represents a **proportional relationship**.

True False

- 4 Compare the **unit rates** (gallons per minute). Circle $>$, $<$, or $=$.



Get Online



Find more at
[ViewMath.com/Grade8](https://www.viewmath.com/Grade8)



Pipe A: 36 gal in 4 min **Pipe B: 50 gal in 5 min**

- 5 A proportional relationship passes through $(5, 20)$. Write the equation in the form $y = kx$.

Equation: _____

- 6 A car uses gas at a constant rate: 2 gallons for every 50 miles. How many gallons does it need for 175 miles?

Gallons: _____

Bonus Challenge

This is a bonus question for extra credit. Give it your best attempt.

- 7 Store A sells fruit for $y = 3x$ (dollars per pound). Store B's prices: 2 lb costs \$5, 4 lb costs \$10. Which store is cheaper, and how much would 10 pounds cost there? Show your work.

 Show your work

Score Summary

I got _____ out of _____ correct.



Find more at
[ViewMath.com/Grade8](https://www.viewmath.com/Grade8)



Answer Key & Explanations



Answer Key

First try each quiz on your own, then check your work here.

Chapter 1

Quiz 1: Real Number Subsets

1 B (Natural, Whole, Integer, Rational, Real)

2 B (Whole)

3 True

4 See explanation

5 $-\frac{5}{2}$ is NOT an integer

6 B (No, it is rational but not an integer)

7 $\sqrt{11}$

Explanations

1 $\sqrt{49} = 7$ because $7 \times 7 = 49$. Since 7 is a counting number, it sits inside **every** subset: $\text{Natural} \subset \text{Whole} \subset \text{Integer} \subset \text{Rational} \subset \text{Real}$. Choice D forgets Natural; choice C also forgets Whole. Common mistake: assuming all square roots are irrational — perfect squares like 49 give whole-number roots. ✓

2 0 belongs to $\text{Whole} = \{0, 1, 2, 3, \dots\}$, but 0 is **not** a Natural number (naturals start at 1). Because $\text{Whole} \subset \text{Integer} \subset \text{Rational} \subset \text{Real}$, the number 0 is also an integer, rational, and real — but its most specific subset is **Whole**. ✓



Get Online



Find more at
[ViewMath.com/Grade8](https://www.viewmath.com/Grade8)



3 Every integer n can be written as $\frac{n}{1}$, a fraction of two integers with a non-zero denominator. For example, $-3 = \frac{-3}{1}$ and $0 = \frac{0}{1}$. Therefore $\text{Integer} \subset \text{Rational}$. Common mistake: thinking only “fractions” like $\frac{2}{3}$ are rational. All integers are rational too! ✓

4 -8 : N, N, Y, Y — negative, so not natural or whole, but it **is** an integer and rational ($\frac{-8}{1}$). $\frac{2}{3}$: N, N, N, Y — a fraction that does not equal a whole number, so only rational (and real). 7: Y, Y, Y, Y — a counting number belongs to **every** listed subset because $\text{Natural} \subset \text{Whole} \subset \text{Integer} \subset \text{Rational}$. ✓

5 $-\frac{5}{2} = -2.5$, which is **not** a whole-number value, so it is not an integer. Integers are $\{\dots, -2, -1, 0, 1, 2, \dots\}$ — no fractions or decimals between them. The student confused “negative” with “integer.” Not all negative numbers are integers! $-\frac{5}{2}$ is rational and real, but not natural, whole, or integer. ✓

6 $0.\overline{3} = \frac{1}{3}$, a repeating decimal, so it is **rational**. But $\frac{1}{3}$ is not a whole-number value, so it is not an integer (and not whole or natural either). It is rational and real only. Common mistake: thinking repeating decimals are irrational because they “go on forever.” Repeating = rational; only non-repeating, non-terminating decimals are irrational. ✓

7 Clue 1 keeps all six numbers (all are real). Clue 2 means irrational: only $\sqrt{11}$ and π remain. Clue 3: $\sqrt{11}$ is the square root of 11 (a whole number) ✓, but π is **not** the square root of any whole number, so π is eliminated. The answer is $\sqrt{11} \approx 3.317$. It is irrational (since 11 is not a perfect square), real, and the square root of a whole number. ✓

Chapter 2

Quiz 2: Graphing Proportional Relationships

1 B (2)

2 24 and 40

3 False

4 <

5 $y = 4x$

6 7



Get Online



Find more at
[ViewMath.com/Grade8](https://www.viewmath.com/Grade8)



7 Store B; \$25

 Explanations

1 For a proportional relationship $y = kx$, pick any point on the line: $k = \frac{y}{x} = \frac{6}{3} = 2$. Common mistake: choosing $k = 3$ (the x -value) or $k = 6$ (the y -value) instead of dividing $y \div x$. ✓

2 The unit rate is $k = 8$ miles per hour. At 3 h: $8 \times 3 = 24$ mi. At 5 h: $8 \times 5 = 40$ mi. In a proportional table, multiply each x -value by k . ✓

3 A proportional relationship has the form $y = kx$ and passes through the origin $(0, 0)$. The equation $y = 5x + 2$ has a y -intercept of 2, so at $x = 0$ we get $y = 2$, not 0. That extra $+2$ means it is **not** proportional. ✓

4 Pipe A: $\frac{36}{4} = 9$ gal/min. Pipe B: $\frac{50}{5} = 10$ gal/min. Since $9 < 10$, Pipe A's rate is **less than** Pipe B's rate. Common mistake: comparing totals (36 vs 50) instead of unit rates. ✓

5 Find k : $k = \frac{y}{x} = \frac{20}{5} = 4$. So the equation is $y = 4x$. Check: $y = 4(5) = 20$. ✓

6 Unit rate: $\frac{2}{50} = 0.04$ gal/mi (or $\frac{50}{2} = 25$ mi/gal). For 175 mi: $175 \div 25 = 7$ gallons. Alternatively, set up a proportion: $\frac{2}{50} = \frac{x}{175}$, so $x = \frac{2 \times 175}{50} = 7$. ✓

7 Store A: $k = 3$ (\$3/lb). Store B: $k = \frac{5}{2} = 2.50$ (\$2.50/lb). Since $\$2.50 < \3.00 , Store B is cheaper. At 10 lb: $10 \times 2.50 = \$25$. Check Store A: $10 \times 3 = \$30$ — that's \$5 more. ✓



Well done checking your answers!

Keep practicing to strengthen your skills.

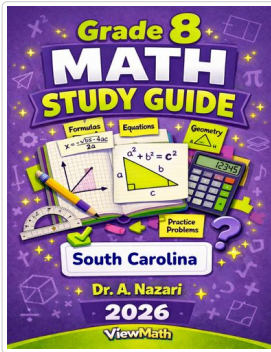


Find more at
[ViewMath.com/Grade8](https://www.viewmath.com/Grade8)



Great Job! Keep Learning with ViewMath!


Keep up the great work! Visit viewmath.com/SC-Grade8 for free lessons, quizzes, and more.



Study Guide



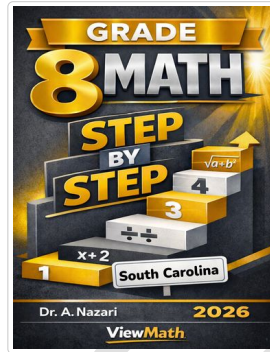
Scan Me



Workbook



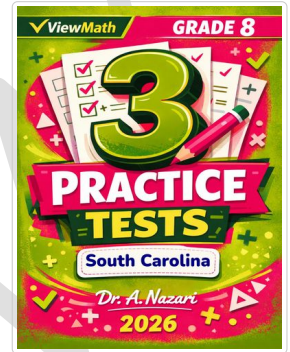
Scan Me



Step-by-Step



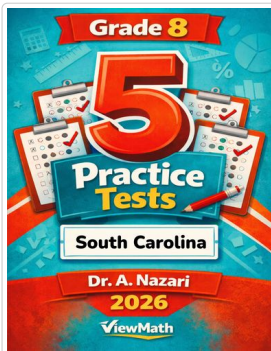
Scan Me



3 Practice Tests




Scan Me



5 Practice Tests



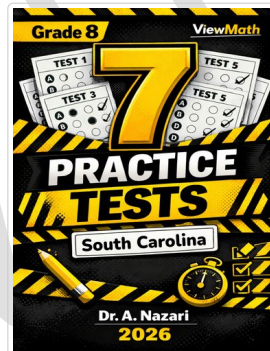
Scan Me



6 Practice Tests



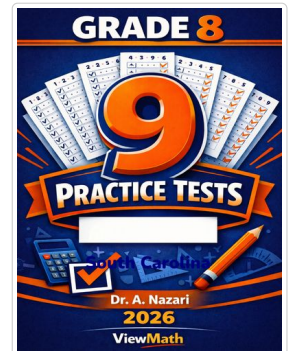
Scan Me



7 Practice Tests



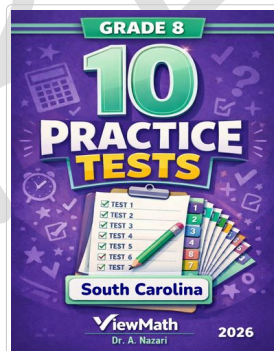
Scan Me



9 Practice Tests



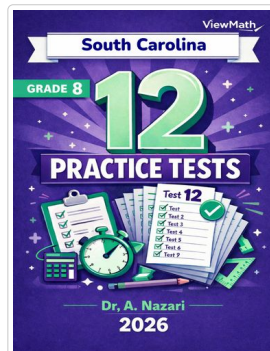
Scan Me



10 Practice Tests



Scan Me



12 Practice Tests



Scan Me



Find more at ViewMath.com/Grade8



THANK YOU

Enjoyed This Preview?

Get the Full Book!

This preview shows just a small sample of what's inside.

The complete book includes:

- ✓ *All chapters and topics*
- ✓ *Hundreds of practice problems*
- ✓ *Complete answer key with explanations*
- ✓ *Colorful visuals and step-by-step examples*
- ✓ *Reference sheets and progress trackers*

 Visit us at [ViewMath.com](https://www.viewmath.com) for free resources and more books!